

Ramakrishna Vivekananda Mission

ENGLISH MEDIUM SCHOOL

Annual Examination—2021

Class—K.G—II

Subject—English

Time : 2-30Hrs

F.M—100

1. Answer the following : $5 \times 4 = 20$

a) Who said to Nell and Bob to spend a day with Granny ?

Ans :

b) Why did Bert want to go back ?

Ans :

c) Why did Nell bend over a tank ?

Ans :

[Turn Over

d) Who went to the park ?

Ans :

2. Make sentences : $3 \times 2 = 6$

a) Camel—

.....

b) Bird—

.....

3. Write the rhyming words : $6 \times 2.5 = 15$

a) Ride —

.....

b) Dog —

.....

c) Bent —

4. Write the opposite words : $4 \times 3 = 12$

a) Town —

b) Far —

c) Day —

d) Up —

5. Write the singular or plural forms of the following : $4 \times 3 = 12$

a) Parrot—

b) - Shoes

c) Rat—

d) - Locks

6. Underline the odd one : $4 \times 2 = 8$

a) parrot, under, bee, river, earth, boat, scooter.

b) box, now, aeroplane, hill, hotel, sky, train.

(4)

c) before, lorry, day, table, as, wolf, butterfly.

d) chain, hour, train, cloud, open, night, roof.

7. Make sensible sentences : $4 \times 3 = 12$

a) fat, am, I.

b) a, this, cat, is.

c) play, we, cricket.

d) milk, give, cows.

8. Write in English : $5 \times 3 = 15$

a) জবা—

b) চাঁপা—

c) জুঁই—

d) ফুলের মালা —

e) গোলাপ —

Ramakrishna Vivekananda Mission

ENGLISH MEDIUM SCHOOL

Annual Examination—2021

Class—K.G—II

Subject—Bengali

Time : 2-30Hrs

F.M—100

১। শূন্যস্থান পূরণ করো :—

১০ × ২ = ২০

- ক) ———— মানুষের ওপর বীরত্ব দেখাও কেন ?
- খ) যাদবের পিতা ———— তাহাকে বিদ্যালয়ে পাঠাইয়া দিতেন ।
- গ) সরোবরে প্রচুর ———— ফুটেছে ।
- ঘ) তোমাকে আজ এমন ———— দেখাচ্ছে কেন ?
- ঙ) সেই পুরানো বাড়ির এখন আর কোনও ———— নেই ।
- চ) আজ ———— স্কুলের মাঠে ফুটবল খেলা ।
- ছ) সেই ———— মন্দির এখন আগাছার জঙ্গলে ঘেরা ।
- জ) ভারতের উত্তরে হিমালয় ———— ।

[Turn Over

ঝ) এস, দুজনে মিলিয়া— — — — করি।

ঞ) ভালই— — — — ধরেছে, চেনাই যায়না।

২। নীচের শব্দগুলি এলোমেলো আছে, সাজিয়ে অর্থ বোধ হয় এমন শব্দ লেখো : $৮ \times ২.৫ = ২০$

ক) নসন্না— খ) শ্মীরকা—

গ) ষন্নবি— ঘ) তন্নক—

ঙ) অন্মাকৎ— চ) শন্নছবে—

ছ) ধান্নিসন— জ) রণন্ন—

৩) নীচের শব্দগুলিতে সঠিক জায়গায় গ-ফলা ন-ফলা ম-ফলাও রেফ বসানো : $১০ \times ২ = ২০$

ক) আগেয়— খ) তুষা—

গ) রশি— ঘ) মযাদা—

৩) সেহ— চ) নিষণ—

ছ) বাগী— জ) নিদয়—

ঝ) বিমষ— ঞ) দুরাতা—

৪। রেফ দিয়ে পাঁচটি শব্দ লেখো :— $৫ \times ২ = ১০$

.....
.....
.....
.....
.....

৫। ম—ফলা দিয়ে পাঁচটি শব্দ লেখো :— $৫ \times ২ = ১০$

.....
.....
.....
.....

৬। প্রশ্নগুলির উত্তর লেখো :— (বাক্য) $8 \times 5 = 20$

ক) যাদব পথে কী করিয়া বেড়াইত ?

.....

.....

খ) মানুষ চিরকাল কেন দুঃখ পায় ?

.....

.....

গ) কে কাহাকে সম্মুখে আসিলে দূর দূর করিয়া
তাড়াইয়া দিতেন ?

.....

.....

ঘ) অভয় বিদ্যালয় গিয়া কী করিল ?

.....

Ramakrishna Vivekananda Mission

ENGLISH MEDIUM SCHOOL

Annual Examination—2021

Class—K.G—II

Subject—Mathematics

Time : 2-30Hrs

F.M—100

1) Subtract and Circle the Correct Option

$$5 \times 2 = 10$$

a) $9 - 2 =$ [] 6, 7, 8

b) $8 - 0 =$ [] 0, 4, 8

c) $9 - 4 =$ [] 5, 4, 3

d) $8 - 4 =$ [] 4, 2, 0

e) $5 - 4 =$ [] 4, 1, 5

2) Add and Compact number $5 \times 3 = 15$

a) 5 tens + 4 tens =

[Turn Over

(2)

b) 6 tens + 7 ones =

c) 9 tens + 0 ones =

d) 5 tens + 2 tens =

e) 7 tens + 9 ones =

3) Fill in the blanks

$5 \times 2 = 10$

a) There are hours in one day.

b) is the third day of the Week.

c) The long hand of the clock is the

..... hand.

d) is the seventh day

(3)

of the week and it is a holiday.

e) is the day before
friday.

4) Expand numbers : $5 \times 3 = 15$

a) $48 = \dots \dots \dots$

b) $70 = \dots \dots \dots$

c) $62 = \dots \dots \dots$

d) $95 = \dots \dots \dots$

e) $21 = \dots \dots \dots$

5) Descending Order : $2 \times 5 = 10$

a) 82, 99, 14, 25, 57, 63, 71

b) 42, 10, 85, 71, 15, 39, 22

[Turn Over

(4)

6) Ascending Order : $2 \times 5 = 10$

a) 68, 25, 91, 14, 89, 25, 73

b) 24, 14, 59, 74, 48, 64, 32

7) Subtraction

$4 \times 5 = 20$

$$\begin{array}{r} T O \\ 65 \\ -20 \\ \hline \end{array}$$

$$\begin{array}{r} T O \\ 86 \\ -9 \\ \hline \end{array}$$

$$\begin{array}{r} T O \\ 96 \\ -34 \\ \hline \end{array}$$

$$\begin{array}{r} T O \\ 89 \\ -45 \\ \hline \end{array}$$

8) Write the table of 4

10

Ramakrishna Vivekananda Mission

ENGLISH MEDIUM SCHOOL

Annual Examination—2021

Class—K.G—II

Subject—EVS

Time : 2-30Hrs

F.M—100

1. Choose the correct option : $5 \times 2 = 10$

- a) The sun gives us— (light / rain)
- b) Rose plant— (big / small)
- c) Clouds bring— (rain / heat)
- d) Banana plant— (small / big)
- e) Money plant—
(cannot stand / can stand)

2. Fill in the blanks : $6 \times 2 = 12$

- a) We see and
at night in the sky.
- b) Very small plant
- c) An example of creeper is
- d) Two sources of water are
and

3. Rearrange the jumbled words : $5 \times 2 = 10$

a) u s d e r t —


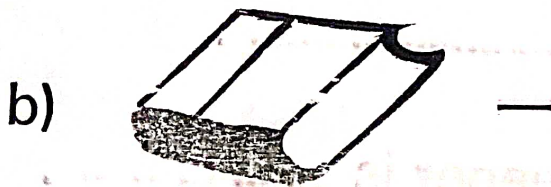

b) h c a r t —

c) o c h s o l —

d) s k e d —

e) h c l a k —

4. Write the name of pictures given below : $3 \times 2 = 6$



5. Write the answers :

a) What is climber ? Give examples :

$$4+2=6$$

Ans :

.....

.....

.....

.....

.....

b) How does a house protect us ? 10

Ans :

.....

.....

.....

.....

(4)

c) Name five natural things that we can see on the earth. 10

Ans :

.....

.....

.....

.....

d) Name three things that your teacher helps you to do in your school. 6

Ans :

e) For which purposes we need water ? 10

Ans :

f) Name five different kind of houses 10

.....

.....

.....

.....

.....

6. Draw a tree and mention the below parts. 10

a) Flower

b) Fruit

c) Leaf

d) Branch

e) Root

Q. Name five different kind of houses - 10

.....

.....

.....

.....

.....

Q. Draw a tree and mention the below parts.

(a) Flower

(b) Fruit

(c) Leaf

(d) Branch

(e) Root

Ramakrishna Vivekananda Mission

ENGLISH MEDIUM SCHOOL

Annual Examination—2021

Class—K.G—II

Subject—G.K.

Time : 2-30Hrs

F.M—100

1. Underline the outdoor games :—

5 × 2 = 10

Badminton, Carrom, Cricket, Chess,
Hockey, Ludo, Kabaddi, Table- tennis,
Football.

2. Answer the following :— 5 × 4 = 20

a) Which bird can see at night ?

Ans :—

b) Name two harmful insects :—

Ans .-

c) Which material is used to make dress ?

Ans :-

.....

d) Name two water birds :-

Ans :-

.....

e) Which material is used to make bucket ?

Ans :-

.....

.....

3. Fill in the blanks :-

5 x 3 = 15

a) Book is made of

b) Window is made of

c) Birds stay at

d) Pan is made of

e) Dog stays at

4. Match the following :— $5 \times 2 = 10$

a) Horse

i) Aquarium

b) Lion

ii) Burrow

c) Rabbit

iii) Stable

d) Bee

vi) Den

e) Fish

v) Beehive

5. Choose the Correct options and write on the blanks :- $5 \times 3 = 15$

a) Hut is made of (metal / mud)

b) Shoes are made of (bricks / leather)

c) Sweater made of (wool/
glass)

d) Wall is made of (wood/
bricks)

e) Door is made of Cloth/
wood)

6. Give the answers :-

a) Name five wild animals :- 10

Ans :

b) Name five indoor game :- 10

Ans :

c) Name five Insects :- 10

Ans :
